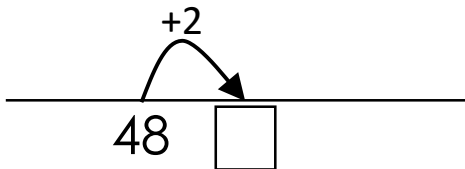
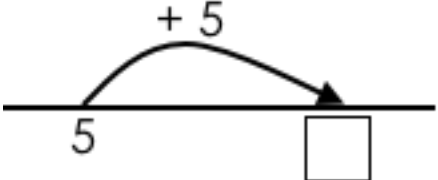
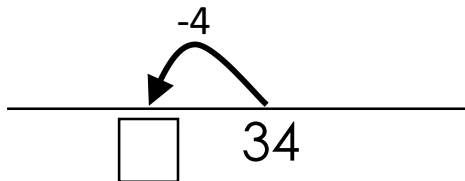


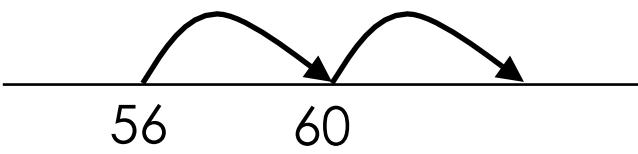
NAME	
-------------	--

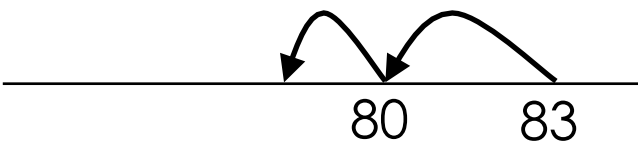
PART ONE
2 MINUTES FOR THIS PAGE


1 $7 + 3 = \square$	11 $50 + 6 = \square$						
2 $2 + 8 = \square$	12 $60 + 3 = \square$						
3 $10 = 7 + \square$	13 $40 + 8 = \square$						
4 8 less than 10 is \square	14 $40 - 7 = \square$						
5 <table border="1" style="width: 100%; height: 60px; border-collapse: collapse; margin-top: 10px;"> <tr> <td style="width: 20%; text-align: center; vertical-align: middle;">2</td> <td style="width: 60%;"></td> <td style="width: 20%; text-align: center; vertical-align: middle;">\square</td> </tr> <tr> <td colspan="3" style="text-align: center; padding-top: 10px;">10</td> </tr> </table>	2		\square	10			15 
2		\square					
10							
6 	16 $100 + 27 = \square$						
7 $10 - 5 = \square$	17 						
8 $10 - 4 = \square$	18 $\square + 8 = 50$						
9 <table border="1" style="width: 100%; height: 60px; border-collapse: collapse; margin-top: 10px;"> <tr> <td style="width: 20%; text-align: center; vertical-align: middle;">1</td> <td style="width: 60%;"></td> <td style="width: 20%; text-align: center; vertical-align: middle;">9</td> </tr> <tr> <td colspan="3" style="text-align: center; padding-top: 10px;">\square</td> </tr> </table>	1		9	\square			19 $30 - \square = 27$
1		9					
\square							
10 $\square + 2 = 10$	20 $87 = 80 + \square$						

Total out of 20:	
-------------------------	--

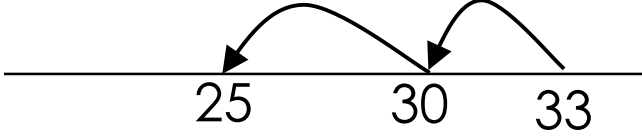
PART TWO
1 MINUTE FOR THIS PAGE

1 $56 + 8 = \square$ 

2 $83 - 4 = \square$ 

3 $93 - 7 = \square$ 

4 $67 + \square = 73$ 

5 
 $33 - \square = 25$

Total out of 5: